



Order the fractions from smallest to largest.

1)  $\frac{3}{5}, \frac{7}{10}, \frac{1}{2}, \frac{1}{4}$

2)  $\frac{2}{3}, \frac{3}{4}, \frac{5}{10}, \frac{3}{5}$

3)  $\frac{2}{5}, \frac{3}{10}, \frac{1}{3}, \frac{2}{4}$

4)  $\frac{1}{10}, \frac{3}{5}, \frac{2}{4}, \frac{2}{3}$

5)  $\frac{1}{5}, \frac{1}{3}, \frac{1}{2}, \frac{9}{10}$

6)  $\frac{2}{4}, \frac{4}{5}, \frac{7}{10}, \frac{2}{3}$

7)  $\frac{2}{3}, \frac{1}{4}, \frac{7}{10}, \frac{4}{5}$

8)  $\frac{4}{5}, \frac{6}{10}, \frac{2}{3}, \frac{1}{2}$

9)  $\frac{3}{5}, \frac{1}{2}, \frac{3}{10}, \frac{1}{3}$

10)  $\frac{1}{5}, \frac{2}{4}, \frac{1}{3}, \frac{1}{10}$

Answers

1. \_\_\_\_\_

2. \_\_\_\_\_

3. \_\_\_\_\_

4. \_\_\_\_\_

5. \_\_\_\_\_

6. \_\_\_\_\_

7. \_\_\_\_\_

8. \_\_\_\_\_

9. \_\_\_\_\_

10. \_\_\_\_\_



Order the fractions from smallest to largest.

1)  $\frac{3}{5}, \frac{7}{10}, \frac{1}{2}, \frac{1}{4}$

2)  $\frac{2}{3}, \frac{3}{4}, \frac{5}{10}, \frac{3}{5}$

3)  $\frac{2}{5}, \frac{3}{10}, \frac{1}{3}, \frac{2}{4}$

4)  $\frac{1}{10}, \frac{3}{5}, \frac{2}{4}, \frac{2}{3}$

5)  $\frac{1}{5}, \frac{1}{3}, \frac{1}{2}, \frac{9}{10}$

6)  $\frac{2}{4}, \frac{4}{5}, \frac{7}{10}, \frac{2}{3}$

7)  $\frac{2}{3}, \frac{1}{4}, \frac{7}{10}, \frac{4}{5}$

8)  $\frac{4}{5}, \frac{6}{10}, \frac{2}{3}, \frac{1}{2}$

9)  $\frac{3}{5}, \frac{1}{2}, \frac{3}{10}, \frac{1}{3}$

10)  $\frac{1}{5}, \frac{2}{4}, \frac{1}{3}, \frac{1}{10}$

**Answers**

1.  $\frac{1}{4}, \frac{1}{2}, \frac{3}{5}, \frac{7}{10}$

2.  $\frac{5}{10}, \frac{3}{5}, \frac{2}{3}, \frac{3}{4}$

3.  $\frac{3}{10}, \frac{1}{3}, \frac{2}{5}, \frac{2}{4}$

4.  $\frac{1}{10}, \frac{2}{4}, \frac{3}{5}, \frac{2}{3}$

5.  $\frac{1}{5}, \frac{1}{3}, \frac{1}{2}, \frac{9}{10}$

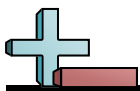
6.  $\frac{2}{4}, \frac{2}{3}, \frac{7}{10}, \frac{4}{5}$

7.  $\frac{1}{4}, \frac{2}{3}, \frac{7}{10}, \frac{4}{5}$

8.  $\frac{1}{2}, \frac{6}{10}, \frac{2}{3}, \frac{4}{5}$

9.  $\frac{3}{10}, \frac{1}{3}, \frac{1}{2}, \frac{3}{5}$

10.  $\frac{1}{10}, \frac{1}{5}, \frac{1}{3}, \frac{2}{4}$



Order the fractions from smallest to largest.

1)  $\frac{1}{2}, \frac{2}{5}, \frac{1}{4}, \frac{9}{10}$

2)  $\frac{3}{4}, \frac{2}{5}, \frac{2}{10}, \frac{1}{3}$

3)  $\frac{1}{2}, \frac{1}{4}, \frac{7}{10}, \frac{1}{3}$

4)  $\frac{1}{2}, \frac{2}{5}, \frac{2}{3}, \frac{7}{10}$

5)  $\frac{3}{5}, \frac{1}{4}, \frac{4}{10}, \frac{2}{3}$

6)  $\frac{2}{3}, \frac{2}{10}, \frac{2}{5}, \frac{1}{2}$

7)  $\frac{1}{3}, \frac{9}{10}, \frac{2}{5}, \frac{3}{4}$

8)  $\frac{1}{4}, \frac{1}{3}, \frac{4}{5}, \frac{9}{10}$

9)  $\frac{1}{5}, \frac{6}{10}, \frac{2}{3}, \frac{3}{4}$

10)  $\frac{1}{4}, \frac{4}{5}, \frac{2}{3}, \frac{2}{10}$

Answers

1. \_\_\_\_\_

2. \_\_\_\_\_

3. \_\_\_\_\_

4. \_\_\_\_\_

5. \_\_\_\_\_

6. \_\_\_\_\_

7. \_\_\_\_\_

8. \_\_\_\_\_

9. \_\_\_\_\_

10. \_\_\_\_\_



Order the fractions from smallest to largest.

1)  $\frac{1}{2}, \frac{2}{5}, \frac{1}{4}, \frac{9}{10}$

2)  $\frac{3}{4}, \frac{2}{5}, \frac{2}{10}, \frac{1}{3}$

3)  $\frac{1}{2}, \frac{1}{4}, \frac{7}{10}, \frac{1}{3}$

4)  $\frac{1}{2}, \frac{2}{5}, \frac{2}{3}, \frac{7}{10}$

5)  $\frac{3}{5}, \frac{1}{4}, \frac{4}{10}, \frac{2}{3}$

6)  $\frac{2}{3}, \frac{2}{10}, \frac{2}{5}, \frac{1}{2}$

7)  $\frac{1}{3}, \frac{9}{10}, \frac{2}{5}, \frac{3}{4}$

8)  $\frac{1}{4}, \frac{1}{3}, \frac{4}{5}, \frac{9}{10}$

9)  $\frac{1}{5}, \frac{6}{10}, \frac{2}{3}, \frac{3}{4}$

10)  $\frac{1}{4}, \frac{4}{5}, \frac{2}{3}, \frac{2}{10}$

**Answers**

1.  $\frac{1}{4}, \frac{2}{5}, \frac{1}{2}, \frac{9}{10}$

2.  $\frac{2}{10}, \frac{1}{3}, \frac{2}{5}, \frac{3}{4}$

3.  $\frac{1}{4}, \frac{1}{3}, \frac{1}{2}, \frac{7}{10}$

4.  $\frac{2}{5}, \frac{1}{2}, \frac{2}{3}, \frac{7}{10}$

5.  $\frac{1}{4}, \frac{4}{10}, \frac{3}{5}, \frac{2}{3}$

6.  $\frac{2}{10}, \frac{2}{5}, \frac{1}{2}, \frac{2}{3}$

7.  $\frac{1}{3}, \frac{2}{5}, \frac{3}{4}, \frac{9}{10}$

8.  $\frac{1}{4}, \frac{1}{3}, \frac{4}{5}, \frac{9}{10}$

9.  $\frac{1}{5}, \frac{6}{10}, \frac{2}{3}, \frac{3}{4}$

10.  $\frac{2}{10}, \frac{1}{4}, \frac{2}{3}, \frac{4}{5}$



Order the fractions from smallest to largest.

1)  $\frac{1}{2}, \frac{3}{10}, \frac{1}{4}, \frac{2}{5}$

2)  $\frac{3}{5}, \frac{1}{4}, \frac{8}{10}, \frac{2}{3}$

3)  $\frac{1}{4}, \frac{2}{5}, \frac{2}{3}, \frac{5}{10}$

4)  $\frac{2}{3}, \frac{1}{2}, \frac{7}{10}, \frac{4}{5}$

5)  $\frac{1}{3}, \frac{1}{2}, \frac{2}{5}, \frac{3}{10}$

6)  $\frac{4}{10}, \frac{1}{3}, \frac{1}{4}, \frac{1}{5}$

7)  $\frac{3}{5}, \frac{7}{10}, \frac{2}{3}, \frac{2}{4}$

8)  $\frac{3}{4}, \frac{4}{5}, \frac{1}{10}, \frac{2}{3}$

9)  $\frac{2}{4}, \frac{1}{3}, \frac{9}{10}, \frac{4}{5}$

10)  $\frac{5}{10}, \frac{3}{5}, \frac{2}{3}, \frac{3}{4}$

Answers

1. \_\_\_\_\_

2. \_\_\_\_\_

3. \_\_\_\_\_

4. \_\_\_\_\_

5. \_\_\_\_\_

6. \_\_\_\_\_

7. \_\_\_\_\_

8. \_\_\_\_\_

9. \_\_\_\_\_

10. \_\_\_\_\_



Order the fractions from smallest to largest.

1)  $\frac{1}{2}, \frac{3}{10}, \frac{1}{4}, \frac{2}{5}$

2)  $\frac{3}{5}, \frac{1}{4}, \frac{8}{10}, \frac{2}{3}$

3)  $\frac{1}{4}, \frac{2}{5}, \frac{2}{3}, \frac{5}{10}$

4)  $\frac{2}{3}, \frac{1}{2}, \frac{7}{10}, \frac{4}{5}$

5)  $\frac{1}{3}, \frac{1}{2}, \frac{2}{5}, \frac{3}{10}$

6)  $\frac{4}{10}, \frac{1}{3}, \frac{1}{4}, \frac{1}{5}$

7)  $\frac{3}{5}, \frac{7}{10}, \frac{2}{3}, \frac{2}{4}$

8)  $\frac{3}{4}, \frac{4}{5}, \frac{1}{10}, \frac{2}{3}$

9)  $\frac{2}{4}, \frac{1}{3}, \frac{9}{10}, \frac{4}{5}$

10)  $\frac{5}{10}, \frac{3}{5}, \frac{2}{3}, \frac{3}{4}$

**Answers**

1.  $\frac{1}{4}, \frac{3}{10}, \frac{2}{5}, \frac{1}{2}$

2.  $\frac{1}{4}, \frac{3}{5}, \frac{2}{3}, \frac{8}{10}$

3.  $\frac{1}{4}, \frac{2}{5}, \frac{5}{10}, \frac{2}{3}$

4.  $\frac{1}{2}, \frac{2}{3}, \frac{7}{10}, \frac{4}{5}$

5.  $\frac{3}{10}, \frac{1}{3}, \frac{2}{5}, \frac{1}{2}$

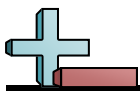
6.  $\frac{1}{5}, \frac{1}{4}, \frac{1}{3}, \frac{4}{10}$

7.  $\frac{2}{4}, \frac{3}{5}, \frac{2}{3}, \frac{7}{10}$

8.  $\frac{1}{10}, \frac{2}{3}, \frac{3}{4}, \frac{4}{5}$

9.  $\frac{1}{3}, \frac{2}{4}, \frac{4}{5}, \frac{9}{10}$

10.  $\frac{5}{10}, \frac{3}{5}, \frac{2}{3}, \frac{3}{4}$



Order the fractions from smallest to largest.

1)  $\frac{2}{5}, \frac{1}{4}, \frac{3}{10}, \frac{1}{3}$

2)  $\frac{8}{10}, \frac{1}{2}, \frac{2}{3}, \frac{1}{4}$

3)  $\frac{3}{4}, \frac{2}{5}, \frac{6}{10}, \frac{1}{2}$

4)  $\frac{1}{5}, \frac{1}{3}, \frac{1}{4}, \frac{3}{10}$

5)  $\frac{2}{10}, \frac{3}{4}, \frac{2}{5}, \frac{2}{3}$

6)  $\frac{2}{4}, \frac{2}{3}, \frac{9}{10}, \frac{2}{5}$

7)  $\frac{5}{10}, \frac{2}{3}, \frac{1}{4}, \frac{2}{5}$

8)  $\frac{5}{10}, \frac{4}{5}, \frac{1}{3}, \frac{3}{4}$

9)  $\frac{1}{5}, \frac{1}{2}, \frac{1}{3}, \frac{3}{4}$

10)  $\frac{1}{3}, \frac{1}{2}, \frac{6}{10}, \frac{4}{5}$

Answers

1. \_\_\_\_\_

2. \_\_\_\_\_

3. \_\_\_\_\_

4. \_\_\_\_\_

5. \_\_\_\_\_

6. \_\_\_\_\_

7. \_\_\_\_\_

8. \_\_\_\_\_

9. \_\_\_\_\_

10. \_\_\_\_\_



Order the fractions from smallest to largest.

1)  $\frac{2}{5}, \frac{1}{4}, \frac{3}{10}, \frac{1}{3}$

2)  $\frac{8}{10}, \frac{1}{2}, \frac{2}{3}, \frac{1}{4}$

3)  $\frac{3}{4}, \frac{2}{5}, \frac{6}{10}, \frac{1}{2}$

4)  $\frac{1}{5}, \frac{1}{3}, \frac{1}{4}, \frac{3}{10}$

5)  $\frac{2}{10}, \frac{3}{4}, \frac{2}{5}, \frac{2}{3}$

6)  $\frac{2}{4}, \frac{2}{3}, \frac{9}{10}, \frac{2}{5}$

7)  $\frac{5}{10}, \frac{2}{3}, \frac{1}{4}, \frac{2}{5}$

8)  $\frac{5}{10}, \frac{4}{5}, \frac{1}{3}, \frac{3}{4}$

9)  $\frac{1}{5}, \frac{1}{2}, \frac{1}{3}, \frac{3}{4}$

10)  $\frac{1}{3}, \frac{1}{2}, \frac{6}{10}, \frac{4}{5}$

**Answers**

1.  $\frac{1}{4}, \frac{3}{10}, \frac{1}{3}, \frac{2}{5}$

2.  $\frac{1}{4}, \frac{1}{2}, \frac{2}{3}, \frac{8}{10}$

3.  $\frac{2}{5}, \frac{1}{2}, \frac{6}{10}, \frac{3}{4}$

4.  $\frac{1}{5}, \frac{1}{4}, \frac{3}{10}, \frac{1}{3}$

5.  $\frac{2}{10}, \frac{2}{5}, \frac{2}{3}, \frac{3}{4}$

6.  $\frac{2}{5}, \frac{2}{4}, \frac{2}{3}, \frac{9}{10}$

7.  $\frac{1}{4}, \frac{2}{5}, \frac{5}{10}, \frac{2}{3}$

8.  $\frac{1}{3}, \frac{5}{10}, \frac{3}{4}, \frac{4}{5}$

9.  $\frac{1}{5}, \frac{1}{3}, \frac{1}{2}, \frac{3}{4}$

10.  $\frac{1}{3}, \frac{1}{2}, \frac{6}{10}, \frac{4}{5}$





Order the fractions from smallest to largest.

1)  $\frac{4}{10}, \frac{3}{4}, \frac{1}{5}, \frac{2}{3}$

2)  $\frac{6}{10}, \frac{3}{4}, \frac{1}{5}, \frac{1}{3}$

3)  $\frac{2}{4}, \frac{7}{10}, \frac{1}{3}, \frac{3}{5}$

4)  $\frac{2}{4}, \frac{2}{3}, \frac{3}{5}, \frac{1}{10}$

5)  $\frac{4}{5}, \frac{3}{10}, \frac{1}{3}, \frac{1}{4}$

6)  $\frac{9}{10}, \frac{1}{3}, \frac{2}{5}, \frac{1}{2}$

7)  $\frac{2}{4}, \frac{9}{10}, \frac{1}{5}, \frac{1}{3}$

8)  $\frac{8}{10}, \frac{1}{3}, \frac{1}{2}, \frac{2}{5}$

9)  $\frac{1}{3}, \frac{2}{5}, \frac{2}{4}, \frac{8}{10}$

10)  $\frac{1}{4}, \frac{1}{5}, \frac{5}{10}, \frac{2}{3}$

Answers

1. \_\_\_\_\_

2. \_\_\_\_\_

3. \_\_\_\_\_

4. \_\_\_\_\_

5. \_\_\_\_\_

6. \_\_\_\_\_

7. \_\_\_\_\_

8. \_\_\_\_\_

9. \_\_\_\_\_

10. \_\_\_\_\_



Order the fractions from smallest to largest.

1)  $\frac{4}{10}, \frac{3}{4}, \frac{1}{5}, \frac{2}{3}$

2)  $\frac{6}{10}, \frac{3}{4}, \frac{1}{5}, \frac{1}{3}$

3)  $\frac{2}{4}, \frac{7}{10}, \frac{1}{3}, \frac{3}{5}$

4)  $\frac{2}{4}, \frac{2}{3}, \frac{3}{5}, \frac{1}{10}$

5)  $\frac{4}{5}, \frac{3}{10}, \frac{1}{3}, \frac{1}{4}$

6)  $\frac{9}{10}, \frac{1}{3}, \frac{2}{5}, \frac{1}{2}$

7)  $\frac{2}{4}, \frac{9}{10}, \frac{1}{5}, \frac{1}{3}$

8)  $\frac{8}{10}, \frac{1}{3}, \frac{1}{2}, \frac{2}{5}$

9)  $\frac{1}{3}, \frac{2}{5}, \frac{2}{4}, \frac{8}{10}$

10)  $\frac{1}{4}, \frac{1}{5}, \frac{5}{10}, \frac{2}{3}$

Answers

1.  $\frac{1}{5}, \frac{4}{10}, \frac{2}{3}, \frac{3}{4}$

2.  $\frac{1}{5}, \frac{1}{3}, \frac{6}{10}, \frac{3}{4}$

3.  $\frac{1}{3}, \frac{2}{4}, \frac{3}{5}, \frac{7}{10}$

4.  $\frac{1}{10}, \frac{2}{4}, \frac{3}{5}, \frac{2}{3}$

5.  $\frac{1}{4}, \frac{3}{10}, \frac{1}{3}, \frac{4}{5}$

6.  $\frac{1}{3}, \frac{2}{5}, \frac{1}{2}, \frac{9}{10}$

7.  $\frac{1}{5}, \frac{1}{3}, \frac{2}{4}, \frac{9}{10}$

8.  $\frac{1}{3}, \frac{2}{5}, \frac{1}{2}, \frac{8}{10}$

9.  $\frac{1}{3}, \frac{2}{5}, \frac{2}{4}, \frac{8}{10}$

10.  $\frac{1}{5}, \frac{1}{4}, \frac{5}{10}, \frac{2}{3}$



Order the fractions from smallest to largest.

1)  $\frac{3}{5}, \frac{5}{10}, \frac{2}{3}, \frac{1}{4}$

2)  $\frac{1}{2}, \frac{3}{4}, \frac{9}{10}, \frac{4}{5}$

3)  $\frac{6}{10}, \frac{3}{4}, \frac{1}{3}, \frac{2}{5}$

4)  $\frac{1}{5}, \frac{1}{3}, \frac{7}{10}, \frac{3}{4}$

5)  $\frac{4}{5}, \frac{3}{4}, \frac{5}{10}, \frac{1}{3}$

6)  $\frac{1}{3}, \frac{2}{5}, \frac{1}{2}, \frac{6}{10}$

7)  $\frac{4}{10}, \frac{3}{5}, \frac{2}{3}, \frac{1}{2}$

8)  $\frac{2}{5}, \frac{3}{4}, \frac{8}{10}, \frac{1}{3}$

9)  $\frac{3}{4}, \frac{2}{3}, \frac{2}{10}, \frac{3}{5}$

10)  $\frac{1}{4}, \frac{2}{3}, \frac{4}{10}, \frac{3}{5}$

Answers

1. \_\_\_\_\_

2. \_\_\_\_\_

3. \_\_\_\_\_

4. \_\_\_\_\_

5. \_\_\_\_\_

6. \_\_\_\_\_

7. \_\_\_\_\_

8. \_\_\_\_\_

9. \_\_\_\_\_

10. \_\_\_\_\_



Order the fractions from smallest to largest.

1)  $\frac{3}{5}, \frac{5}{10}, \frac{2}{3}, \frac{1}{4}$

2)  $\frac{1}{2}, \frac{3}{4}, \frac{9}{10}, \frac{4}{5}$

3)  $\frac{6}{10}, \frac{3}{4}, \frac{1}{3}, \frac{2}{5}$

4)  $\frac{1}{5}, \frac{1}{3}, \frac{7}{10}, \frac{3}{4}$

5)  $\frac{4}{5}, \frac{3}{4}, \frac{5}{10}, \frac{1}{3}$

6)  $\frac{1}{3}, \frac{2}{5}, \frac{1}{2}, \frac{6}{10}$

7)  $\frac{4}{10}, \frac{3}{5}, \frac{2}{3}, \frac{1}{2}$

8)  $\frac{2}{5}, \frac{3}{4}, \frac{8}{10}, \frac{1}{3}$

9)  $\frac{3}{4}, \frac{2}{3}, \frac{2}{10}, \frac{3}{5}$

10)  $\frac{1}{4}, \frac{2}{3}, \frac{4}{10}, \frac{3}{5}$

**Answers**

1.  $\frac{1}{4}, \frac{5}{10}, \frac{3}{5}, \frac{2}{3}$

2.  $\frac{1}{2}, \frac{3}{4}, \frac{4}{5}, \frac{9}{10}$

3.  $\frac{1}{3}, \frac{2}{5}, \frac{6}{10}, \frac{3}{4}$

4.  $\frac{1}{5}, \frac{1}{3}, \frac{7}{10}, \frac{3}{4}$

5.  $\frac{1}{3}, \frac{5}{10}, \frac{3}{4}, \frac{4}{5}$

6.  $\frac{1}{3}, \frac{2}{5}, \frac{1}{2}, \frac{6}{10}$

7.  $\frac{4}{10}, \frac{1}{2}, \frac{3}{5}, \frac{2}{3}$

8.  $\frac{1}{3}, \frac{2}{5}, \frac{3}{4}, \frac{8}{10}$

9.  $\frac{2}{10}, \frac{3}{5}, \frac{2}{3}, \frac{3}{4}$

10.  $\frac{1}{4}, \frac{4}{10}, \frac{3}{5}, \frac{2}{3}$



Order the fractions from smallest to largest.

1)  $\frac{1}{10}, \frac{1}{2}, \frac{1}{4}, \frac{1}{5}$

2)  $\frac{3}{5}, \frac{9}{10}, \frac{1}{4}, \frac{2}{3}$

3)  $\frac{1}{3}, \frac{1}{5}, \frac{8}{10}, \frac{1}{4}$

4)  $\frac{3}{10}, \frac{1}{2}, \frac{4}{5}, \frac{2}{3}$

5)  $\frac{1}{3}, \frac{2}{4}, \frac{2}{5}, \frac{7}{10}$

6)  $\frac{2}{4}, \frac{2}{3}, \frac{4}{10}, \frac{1}{5}$

7)  $\frac{2}{3}, \frac{8}{10}, \frac{2}{5}, \frac{2}{4}$

8)  $\frac{3}{10}, \frac{2}{4}, \frac{2}{3}, \frac{1}{5}$

9)  $\frac{2}{3}, \frac{3}{4}, \frac{4}{5}, \frac{3}{10}$

10)  $\frac{1}{2}, \frac{1}{5}, \frac{4}{10}, \frac{3}{4}$

Answers

1. \_\_\_\_\_

2. \_\_\_\_\_

3. \_\_\_\_\_

4. \_\_\_\_\_

5. \_\_\_\_\_

6. \_\_\_\_\_

7. \_\_\_\_\_

8. \_\_\_\_\_

9. \_\_\_\_\_

10. \_\_\_\_\_



Order the fractions from smallest to largest.

1)  $\frac{1}{10}, \frac{1}{2}, \frac{1}{4}, \frac{1}{5}$

2)  $\frac{3}{5}, \frac{9}{10}, \frac{1}{4}, \frac{2}{3}$

3)  $\frac{1}{3}, \frac{1}{5}, \frac{8}{10}, \frac{1}{4}$

4)  $\frac{3}{10}, \frac{1}{2}, \frac{4}{5}, \frac{2}{3}$

5)  $\frac{1}{3}, \frac{2}{4}, \frac{2}{5}, \frac{7}{10}$

6)  $\frac{2}{4}, \frac{2}{3}, \frac{4}{10}, \frac{1}{5}$

7)  $\frac{2}{3}, \frac{8}{10}, \frac{2}{5}, \frac{2}{4}$

8)  $\frac{3}{10}, \frac{2}{4}, \frac{2}{3}, \frac{1}{5}$

9)  $\frac{2}{3}, \frac{3}{4}, \frac{4}{5}, \frac{3}{10}$

10)  $\frac{1}{2}, \frac{1}{5}, \frac{4}{10}, \frac{3}{4}$

Answers

1.  $\frac{1}{10}, \frac{1}{5}, \frac{1}{4}, \frac{1}{2}$

2.  $\frac{1}{4}, \frac{3}{5}, \frac{2}{3}, \frac{9}{10}$

3.  $\frac{1}{5}, \frac{1}{4}, \frac{1}{3}, \frac{8}{10}$

4.  $\frac{3}{10}, \frac{1}{2}, \frac{2}{3}, \frac{4}{5}$

5.  $\frac{1}{3}, \frac{2}{5}, \frac{2}{4}, \frac{7}{10}$

6.  $\frac{1}{5}, \frac{4}{10}, \frac{2}{4}, \frac{2}{3}$

7.  $\frac{2}{5}, \frac{2}{4}, \frac{2}{3}, \frac{8}{10}$

8.  $\frac{1}{5}, \frac{3}{10}, \frac{2}{4}, \frac{2}{3}$

9.  $\frac{3}{10}, \frac{2}{3}, \frac{3}{4}, \frac{4}{5}$

10.  $\frac{1}{5}, \frac{4}{10}, \frac{1}{2}, \frac{3}{4}$



Order the fractions from smallest to largest.

1)  $\frac{3}{5}, \frac{1}{4}, \frac{1}{3}, \frac{4}{10}$

2)  $\frac{1}{2}, \frac{1}{10}, \frac{3}{4}, \frac{1}{3}$

3)  $\frac{3}{5}, \frac{1}{3}, \frac{3}{4}, \frac{5}{10}$

4)  $\frac{2}{4}, \frac{7}{10}, \frac{4}{5}, \frac{1}{3}$

5)  $\frac{6}{10}, \frac{1}{5}, \frac{1}{2}, \frac{1}{4}$

6)  $\frac{3}{5}, \frac{1}{4}, \frac{2}{3}, \frac{7}{10}$

7)  $\frac{1}{3}, \frac{2}{4}, \frac{3}{5}, \frac{8}{10}$

8)  $\frac{1}{3}, \frac{2}{5}, \frac{2}{10}, \frac{1}{4}$

9)  $\frac{2}{3}, \frac{1}{4}, \frac{8}{10}, \frac{2}{5}$

10)  $\frac{9}{10}, \frac{4}{5}, \frac{1}{4}, \frac{1}{3}$

**Answers**

1. \_\_\_\_\_

2. \_\_\_\_\_

3. \_\_\_\_\_

4. \_\_\_\_\_

5. \_\_\_\_\_

6. \_\_\_\_\_

7. \_\_\_\_\_

8. \_\_\_\_\_

9. \_\_\_\_\_

10. \_\_\_\_\_



Order the fractions from smallest to largest.

1)  $\frac{3}{5}, \frac{1}{4}, \frac{1}{3}, \frac{4}{10}$

2)  $\frac{1}{2}, \frac{1}{10}, \frac{3}{4}, \frac{1}{3}$

3)  $\frac{3}{5}, \frac{1}{3}, \frac{3}{4}, \frac{5}{10}$

4)  $\frac{2}{4}, \frac{7}{10}, \frac{4}{5}, \frac{1}{3}$

5)  $\frac{6}{10}, \frac{1}{5}, \frac{1}{2}, \frac{1}{4}$

6)  $\frac{3}{5}, \frac{1}{4}, \frac{2}{3}, \frac{7}{10}$

7)  $\frac{1}{3}, \frac{2}{4}, \frac{3}{5}, \frac{8}{10}$

8)  $\frac{1}{3}, \frac{2}{5}, \frac{2}{10}, \frac{1}{4}$

9)  $\frac{2}{3}, \frac{1}{4}, \frac{8}{10}, \frac{2}{5}$

10)  $\frac{9}{10}, \frac{4}{5}, \frac{1}{4}, \frac{1}{3}$

**Answers**

1.  $\frac{1}{4}, \frac{1}{3}, \frac{4}{10}, \frac{3}{5}$

2.  $\frac{1}{10}, \frac{1}{3}, \frac{1}{2}, \frac{3}{4}$

3.  $\frac{1}{3}, \frac{5}{10}, \frac{3}{5}, \frac{3}{4}$

4.  $\frac{1}{3}, \frac{2}{4}, \frac{7}{10}, \frac{4}{5}$

5.  $\frac{1}{5}, \frac{1}{4}, \frac{1}{2}, \frac{6}{10}$

6.  $\frac{1}{4}, \frac{3}{5}, \frac{2}{3}, \frac{7}{10}$

7.  $\frac{1}{3}, \frac{2}{4}, \frac{3}{5}, \frac{8}{10}$

8.  $\frac{2}{10}, \frac{1}{4}, \frac{1}{3}, \frac{2}{5}$

9.  $\frac{1}{4}, \frac{2}{5}, \frac{2}{3}, \frac{8}{10}$

10.  $\frac{1}{4}, \frac{1}{3}, \frac{4}{5}, \frac{9}{10}$





Order the fractions from smallest to largest.

1)  $\frac{1}{10}, \frac{2}{5}, \frac{1}{4}, \frac{1}{2}$

2)  $\frac{3}{10}, \frac{1}{4}, \frac{1}{5}, \frac{1}{3}$

3)  $\frac{2}{5}, \frac{2}{3}, \frac{6}{10}, \frac{3}{4}$

4)  $\frac{3}{5}, \frac{1}{4}, \frac{1}{3}, \frac{2}{10}$

5)  $\frac{9}{10}, \frac{2}{3}, \frac{4}{5}, \frac{1}{2}$

6)  $\frac{2}{10}, \frac{3}{4}, \frac{2}{3}, \frac{2}{5}$

7)  $\frac{2}{5}, \frac{2}{10}, \frac{1}{2}, \frac{2}{3}$

8)  $\frac{1}{10}, \frac{2}{4}, \frac{3}{5}, \frac{1}{3}$

9)  $\frac{8}{10}, \frac{1}{2}, \frac{3}{4}, \frac{3}{5}$

10)  $\frac{2}{3}, \frac{2}{5}, \frac{3}{4}, \frac{5}{10}$

Answers

1. \_\_\_\_\_

2. \_\_\_\_\_

3. \_\_\_\_\_

4. \_\_\_\_\_

5. \_\_\_\_\_

6. \_\_\_\_\_

7. \_\_\_\_\_

8. \_\_\_\_\_

9. \_\_\_\_\_

10. \_\_\_\_\_



Order the fractions from smallest to largest.

1)  $\frac{1}{10}, \frac{2}{5}, \frac{1}{4}, \frac{1}{2}$

2)  $\frac{3}{10}, \frac{1}{4}, \frac{1}{5}, \frac{1}{3}$

3)  $\frac{2}{5}, \frac{2}{3}, \frac{6}{10}, \frac{3}{4}$

4)  $\frac{3}{5}, \frac{1}{4}, \frac{1}{3}, \frac{2}{10}$

5)  $\frac{9}{10}, \frac{2}{3}, \frac{4}{5}, \frac{1}{2}$

6)  $\frac{2}{10}, \frac{3}{4}, \frac{2}{3}, \frac{2}{5}$

7)  $\frac{2}{5}, \frac{2}{10}, \frac{1}{2}, \frac{2}{3}$

8)  $\frac{1}{10}, \frac{2}{4}, \frac{3}{5}, \frac{1}{3}$

9)  $\frac{8}{10}, \frac{1}{2}, \frac{3}{4}, \frac{3}{5}$

10)  $\frac{2}{3}, \frac{2}{5}, \frac{3}{4}, \frac{5}{10}$

Answers

1.  $\frac{1}{10}, \frac{1}{4}, \frac{2}{5}, \frac{1}{2}$

2.  $\frac{1}{5}, \frac{1}{4}, \frac{3}{10}, \frac{1}{3}$

3.  $\frac{2}{5}, \frac{6}{10}, \frac{2}{3}, \frac{3}{4}$

4.  $\frac{2}{10}, \frac{1}{4}, \frac{1}{3}, \frac{3}{5}$

5.  $\frac{1}{2}, \frac{2}{3}, \frac{4}{5}, \frac{9}{10}$

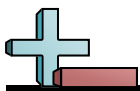
6.  $\frac{2}{10}, \frac{2}{5}, \frac{2}{3}, \frac{3}{4}$

7.  $\frac{2}{10}, \frac{2}{5}, \frac{1}{2}, \frac{2}{3}$

8.  $\frac{1}{10}, \frac{1}{3}, \frac{2}{4}, \frac{3}{5}$

9.  $\frac{1}{2}, \frac{3}{5}, \frac{3}{4}, \frac{8}{10}$

10.  $\frac{2}{5}, \frac{5}{10}, \frac{2}{3}, \frac{3}{4}$



Order the fractions from smallest to largest.

1)  $\frac{6}{10}, \frac{2}{3}, \frac{1}{2}, \frac{2}{5}$

2)  $\frac{1}{3}, \frac{6}{10}, \frac{4}{5}, \frac{2}{4}$

3)  $\frac{1}{4}, \frac{2}{3}, \frac{5}{10}, \frac{1}{5}$

4)  $\frac{1}{3}, \frac{3}{5}, \frac{2}{4}, \frac{9}{10}$

5)  $\frac{3}{4}, \frac{1}{3}, \frac{4}{5}, \frac{4}{10}$

6)  $\frac{3}{5}, \frac{1}{2}, \frac{2}{3}, \frac{7}{10}$

7)  $\frac{1}{5}, \frac{3}{4}, \frac{2}{3}, \frac{8}{10}$

8)  $\frac{2}{5}, \frac{1}{4}, \frac{1}{3}, \frac{2}{10}$

9)  $\frac{2}{3}, \frac{3}{4}, \frac{3}{10}, \frac{1}{5}$

10)  $\frac{3}{10}, \frac{1}{3}, \frac{1}{2}, \frac{3}{5}$

**Answers**

1. \_\_\_\_\_

2. \_\_\_\_\_

3. \_\_\_\_\_

4. \_\_\_\_\_

5. \_\_\_\_\_

6. \_\_\_\_\_

7. \_\_\_\_\_

8. \_\_\_\_\_

9. \_\_\_\_\_

10. \_\_\_\_\_



Order the fractions from smallest to largest.

1)  $\frac{6}{10}, \frac{2}{3}, \frac{1}{2}, \frac{2}{5}$

2)  $\frac{1}{3}, \frac{6}{10}, \frac{4}{5}, \frac{2}{4}$

3)  $\frac{1}{4}, \frac{2}{3}, \frac{5}{10}, \frac{1}{5}$

4)  $\frac{1}{3}, \frac{3}{5}, \frac{2}{4}, \frac{9}{10}$

5)  $\frac{3}{4}, \frac{1}{3}, \frac{4}{5}, \frac{4}{10}$

6)  $\frac{3}{5}, \frac{1}{2}, \frac{2}{3}, \frac{7}{10}$

7)  $\frac{1}{5}, \frac{3}{4}, \frac{2}{3}, \frac{8}{10}$

8)  $\frac{2}{5}, \frac{1}{4}, \frac{1}{3}, \frac{2}{10}$

9)  $\frac{2}{3}, \frac{3}{4}, \frac{3}{10}, \frac{1}{5}$

10)  $\frac{3}{10}, \frac{1}{3}, \frac{1}{2}, \frac{3}{5}$

Answers

1.  $\frac{2}{5}, \frac{1}{2}, \frac{6}{10}, \frac{2}{3}$

2.  $\frac{1}{3}, \frac{2}{4}, \frac{6}{10}, \frac{4}{5}$

3.  $\frac{1}{5}, \frac{1}{4}, \frac{5}{10}, \frac{2}{3}$

4.  $\frac{1}{3}, \frac{2}{4}, \frac{3}{5}, \frac{9}{10}$

5.  $\frac{1}{3}, \frac{4}{10}, \frac{3}{4}, \frac{4}{5}$

6.  $\frac{1}{2}, \frac{3}{5}, \frac{2}{3}, \frac{7}{10}$

7.  $\frac{1}{5}, \frac{2}{3}, \frac{3}{4}, \frac{8}{10}$

8.  $\frac{2}{10}, \frac{1}{4}, \frac{1}{3}, \frac{2}{5}$

9.  $\frac{1}{5}, \frac{3}{10}, \frac{2}{3}, \frac{3}{4}$

10.  $\frac{3}{10}, \frac{1}{3}, \frac{1}{2}, \frac{3}{5}$